

Analysis (Aufgabenheft)

Kapitel 4

Aufgabe 4.4

$$(c) \int_1^4 x^5(2x + 5) dx$$

$$(d) \int_{-2}^2 (2x - 3)^2 dx$$

Aufgabe 4.4

$$\begin{aligned} \text{(a)} \quad \int_{-3}^{-2} (x^3 + 6x) \, dx &= \left[\frac{1}{4}x^4 + 3x^2 \right]_{-3}^{-2} \\ &= 16 - \frac{189}{4} = -\frac{125}{4} = -31.25 \end{aligned}$$

Aufgabe 4.4

$$\begin{aligned} \text{(a)} \quad \int_{-3}^{-2} (x^3 + 6x) \, dx &= \left[\frac{1}{4}x^4 + 3x^2 \right]_{-3}^{-2} \\ &= 16 - \frac{189}{4} = -\frac{125}{4} = -31.25 \end{aligned}$$

$$\begin{aligned} \text{(b)} \quad \int_{-2}^1 (x^4 - 5) \, dx &= \left[\frac{1}{5}x^5 - 5x \right]_{-2}^1 \\ &= -\frac{24}{5} - \frac{18}{5} = -\frac{42}{5} = -8.4 \end{aligned}$$

Aufgabe 4.4

$$\begin{aligned} \text{(a)} \quad \int_{-3}^{-2} (x^3 + 6x) \, dx &= \left[\frac{1}{4}x^4 + 3x^2 \right]_{-3}^{-2} \\ &= 16 - \frac{189}{4} = -\frac{125}{4} = -31.25 \end{aligned}$$

$$\begin{aligned} \text{(b)} \quad \int_{-2}^1 (x^4 - 5) \, dx &= \left[\frac{1}{5}x^5 - 5x \right]_{-2}^1 \\ &= -\frac{24}{5} - \frac{18}{5} = -\frac{42}{5} = -8.4 \end{aligned}$$

$$\begin{aligned} \text{(c)} \quad \int_1^4 x^5(2x + 5) \, dx &= \int_1^4 (2x^6 + 5x^5) \, dx = \left[\frac{2}{7}x^7 + \frac{5}{6}x^6 \right]_1^4 \\ &\approx 8093.56 \end{aligned}$$

$$\begin{aligned} \text{(d)} \quad \int_{-2}^2 (2x - 3)^2 dx &= \int_{-2}^2 (4x^2 - 12x + 9) dx \\ &= \left[\frac{4}{3}x^3 - 6x^2 + 9x \right]_{-2}^2 \\ &= \frac{14}{3} - \left(-\frac{158}{3} \right) = \frac{172}{3} = 57.\bar{3} \end{aligned}$$

Aufgabe 4.5

Ermittle k für

$$(a) \int_1^3 (1.5x^2 + 3x + k) dx = 17$$

$$(b) \int_{-1}^0 (3x^2 - kx + k) dx = -2$$

Aufgabe 4.5

$$(a) \quad \int_1^3 (1.5x^2 + 3x + k) dx = 17$$

$$\left[\frac{1}{2}x^3 + \frac{3}{2}x^2 + kx \right]_1^3 = 17$$

$$\left(\frac{27}{2} + \frac{27}{2} + 3k \right) - \left(\frac{1}{2} + \frac{3}{2} + k \right) = 17$$

$$25 + 2k = 17$$

$$k = -4$$

$$(b) \int_{-1}^0 (3x^2 - kx + k) dx = -2$$

$$\left[x^3 - \frac{k}{2}x^2 + kx \right]_{-1}^0 = -2$$

$$0 - \left(-1 - \frac{k}{2} - k \right) = -2$$

$$1 + \frac{3k}{2} = -2$$

$$\frac{3k}{2} = -3$$

$$3k = -6$$

$$k = -2$$

Aufgabe 4.6

Berechne den Inhalt der vom Graphen der Funktion $f: x \mapsto y$ und der x -Achse eingeschlossenen Flächenstücke.

(a) $f: y = x^2 - 5x + 4$

(b) $f: y = x^3 - 2x^2 - 3x$

(c) $f: y = x^4 - 10x^2 + 9$

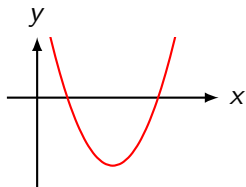
Aufgabe 4.6

(a) $f(x) = x^2 - 5x + 4 = (x - 1)(x - 4)$

Nullstellen: $x_1 = 1, x_2 = 4$

asymptotisches Verhalten: $\lim_{x \rightarrow +\infty} f(x) = \lim_{x \rightarrow +\infty} x^2 = +\infty$

$$\lim_{x \rightarrow -\infty} f(x) = \lim_{x \rightarrow -\infty} x^2 = +\infty$$



$$I = \int_1^4 (x^2 - 5x + 4) dx = \left[\frac{1}{3}x^3 - \frac{5}{2}x^2 + 4x \right]_1^4 = -4.5$$

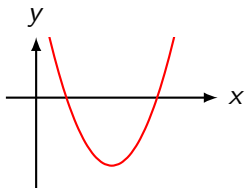
Aufgabe 4.6

(a) $f(x) = x^2 - 5x + 4 = (x - 1)(x - 4)$

Nullstellen: $x_1 = 1, x_2 = 4$

asymptotisches Verhalten: $\lim_{x \rightarrow +\infty} f(x) = \lim_{x \rightarrow +\infty} x^2 = +\infty$

$$\lim_{x \rightarrow -\infty} f(x) = \lim_{x \rightarrow -\infty} x^2 = +\infty$$



$$I = \int_1^4 (x^2 - 5x + 4) dx = \left[\frac{1}{3}x^3 - \frac{5}{2}x^2 + 4x \right]_1^4 = -4.5$$

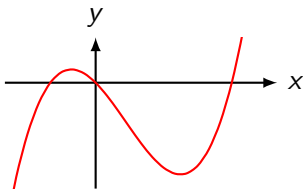
$$A = |I| = 4.5$$

$$(b) f(x) = x^3 - 2x^2 - 3x = x(x^2 - 2x - 3) = x(x - 3)(x + 1)$$

Nullstellen: $x_1 = -1$, $x_2 = 0$, $x_3 = 3$

asymptotisches Verhalten: $\lim_{x \rightarrow +\infty} f(x) = \lim_{x \rightarrow +\infty} x^3 = +\infty$

$$\lim_{x \rightarrow -\infty} f(x) = \lim_{x \rightarrow -\infty} x^3 = -\infty$$



$$I_1 = \int_{-1}^0 f(x) dx = \left[\frac{1}{4}x^4 - \frac{2}{3}x^3 - \frac{3}{2}x^2 \right]_{-1}^0 = \frac{7}{12}$$

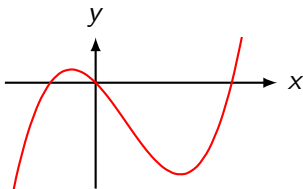
$$I_2 = \int_0^3 f(x) dx = [\dots]_0^3 = -\frac{45}{4}$$

$$(b) f(x) = x^3 - 2x^2 - 3x = x(x^2 - 2x - 3) = x(x - 3)(x + 1)$$

Nullstellen: $x_1 = -1$, $x_2 = 0$, $x_3 = 3$

$$\text{asymptotisches Verhalten: } \lim_{x \rightarrow +\infty} f(x) = \lim_{x \rightarrow +\infty} x^3 = +\infty$$

$$\lim_{x \rightarrow -\infty} f(x) = \lim_{x \rightarrow -\infty} x^3 = -\infty$$



$$I_1 = \int_{-1}^0 f(x) dx = \left[\frac{1}{4}x^4 - \frac{2}{3}x^3 - \frac{3}{2}x^2 \right]_{-1}^0 = \frac{7}{12}$$

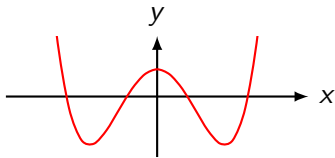
$$I_2 = \int_0^3 f(x) dx = [\dots]_0^3 = -\frac{45}{4}$$

$$A = |I_1| + |I_2| = \frac{71}{6} = 11.8\bar{3}$$

$$(c) f(x) = x^4 - 10x^2 + 9 = (x^2 - 1)(x^2 - 9) \\ = (x - 1)(x + 1)(x - 9)(x + 9)$$

Nullstellen: $x_1 = -3$, $x_2 = -1$, $x_3 = 1$, $x_4 = 9$

asymptotisches Verhalten: $\lim_{x \rightarrow +\infty} f(x) = \lim_{x \rightarrow +\infty} x^3 = +\infty$
 $\lim_{x \rightarrow -\infty} f(x) = \lim_{x \rightarrow -\infty} x^3 = +\infty$



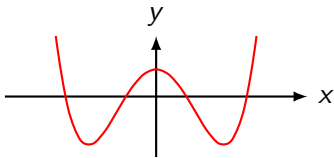
$$I_1 = \int_0^1 f(x) dx = \left[\frac{1}{5}x^5 - \frac{10}{3}x^3 + \frac{9}{2}x \right]_0^1 = \frac{88}{15}$$

$$I_2 = \int_1^3 f(x) dx = [\dots]_1^3 = -\frac{304}{15}$$

$$(c) f(x) = x^4 - 10x^2 + 9 = (x^2 - 1)(x^2 - 9) \\ = (x - 1)(x + 1)(x - 9)(x + 9)$$

Nullstellen: $x_1 = -3$, $x_2 = -1$, $x_3 = 1$, $x_4 = 9$

asymptotisches Verhalten: $\lim_{x \rightarrow +\infty} f(x) = \lim_{x \rightarrow +\infty} x^3 = +\infty$
 $\lim_{x \rightarrow -\infty} f(x) = \lim_{x \rightarrow -\infty} x^3 = +\infty$



$$I_1 = \int_0^1 f(x) dx = \left[\frac{1}{5}x^5 - \frac{10}{3}x^3 + \frac{9}{2}x \right]_0^1 = \frac{88}{15}$$

$$I_2 = \int_1^3 f(x) dx = [\dots]_1^3 = -\frac{304}{15}$$

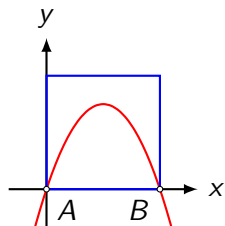
$$A = 2(|I_1| + |I_2|) = \frac{784}{15} = 52.2\bar{6} \quad (\text{wegen Symmetrie})$$

Aufgabe 4.7

Die Parabel $p: y = 3x - x^2$ schneidet die x -Achse in den Nullstellen A und B . Zeige, dass die Parabel das im 1. Quadranten liegende Quadrat mit der Seite AB halbiert.

Aufgabe 4.7

$$p(x) = 3x - x^2 = x(3 - x) \Rightarrow x_1 = 0, x_2 = 3$$

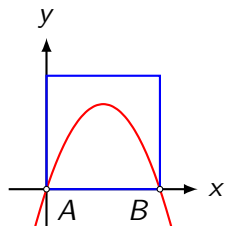


$$\text{Test: } f(1.5) = 1.5(3 - 1.5) = 2.25 \leq 3 \text{ (ok)}$$

$$A_p = \int_0^3 f(x) dx = \left[\frac{3}{2}x^2 - \frac{1}{3}x^3 \right]_0^3 = 13.5 - 9 - (0 - 0) = 4.5$$

Aufgabe 4.7

$$p(x) = 3x - x^2 = x(3 - x) \Rightarrow x_1 = 0, x_2 = 3$$



$$\text{Test: } f(1.5) = 1.5(3 - 1.5) = 2.25 \leq 3 \text{ (ok)}$$

$$A_p = \int_0^3 f(x) dx = \left[\frac{3}{2}x^2 - \frac{1}{3}x^3 \right]_0^3 = 13.5 - 9 - (0 - 0) = 4.5$$

$$\frac{1}{2}\overline{AB}^2 = \frac{1}{2} \cdot 9 = 4.5 \text{ (ok)}$$

Aufgabe 4.8

Die Parabel $p: y = ax - x^3$ schliesst im 1. Quadranten mit der x -Achse eine Fläche vom Inhalt $A = 9$ ein. Bestimme den Wert von a .

Aufgabe 4.8

$$p(x) = ax - x^3 = x(a - x^2) = x(\sqrt{a} - x)(\sqrt{a} + x)$$

Aufgabe 4.8

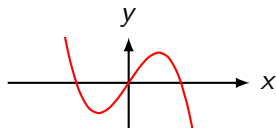
$$p(x) = ax - x^3 = x(a - x^2) = x(\sqrt{a} - x)(\sqrt{a} + x)$$

Nullstellen: $x_1 = -\sqrt{a}$, $x_2 = 0$, $x_3 = \sqrt{a}$

Aufgabe 4.8

$$p(x) = ax - x^3 = x(a - x^2) = x(\sqrt{a} - x)(\sqrt{a} + x)$$

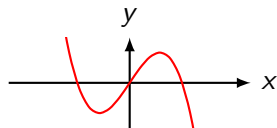
Nullstellen: $x_1 = -\sqrt{a}$, $x_2 = 0$, $x_3 = \sqrt{a}$



Aufgabe 4.8

$$p(x) = ax - x^3 = x(a - x^2) = x(\sqrt{a} - x)(\sqrt{a} + x)$$

$$\text{Nullstellen: } x_1 = -\sqrt{a}, x_2 = 0, x_3 = \sqrt{a}$$



$$\int_0^{\sqrt{a}} (ax - x^3) dx = 9$$

$$\left[\frac{1}{2}ax^2 - \frac{1}{4}x^4 \right]_0^{\sqrt{a}} = 9$$

$$\frac{1}{2}a^2 - \frac{1}{4}a^2 = 9$$

$$\frac{1}{4}a^2 = 9$$

$$a = 6$$

Aufgabe 4.9

Eine Parabel 3. Ordnung hat in $P(1, 0)$ die Steigung $m = 1$ und berührt die x -Achse im Koordinatenursprung.

- (a) Bestimme die Parabelgleichung, skizziere die Parabel.
- (b) Berechne den Inhalt der Fläche zwischen der Parabel und der x -Achse.

Aufgabe 4.9

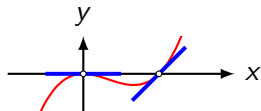
$$\text{Ansatz: } f(x) = ax^3 + bx^2 + cx + d$$

$$f'(x) = 3ax^2 + 2bx + c$$

Aufgabe 4.9

$$\text{Ansatz: } f(x) = ax^3 + bx^2 + cx + d$$

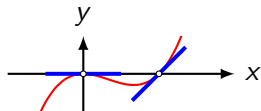
$$f'(x) = 3ax^2 + 2bx + c$$



Aufgabe 4.9

$$\text{Ansatz: } f(x) = ax^3 + bx^2 + cx + d$$

$$f'(x) = 3ax^2 + 2bx + c$$

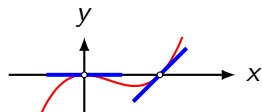


$$f(1) = 0: \quad a + b + c + d = 0 \quad (1)$$

Aufgabe 4.9

$$\text{Ansatz: } f(x) = ax^3 + bx^2 + cx + d$$

$$f'(x) = 3ax^2 + 2bx + c$$



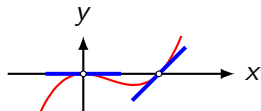
$$f(1) = 0: \quad a + b + c + d = 0 \quad (1)$$

$$f'(1) = 1: \quad 3a + 2b + c = 1 \quad (2)$$

Aufgabe 4.9

$$\text{Ansatz: } f(x) = ax^3 + bx^2 + cx + d$$

$$f'(x) = 3ax^2 + 2bx + c$$



$$f(1) = 0: \quad a + b + c + d = 0 \quad (1)$$

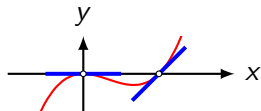
$$f'(1) = 1: \quad 3a + 2b + c = 1 \quad (2)$$

$$f(0) = 0: \quad d = 0 \quad (3)$$

Aufgabe 4.9

$$\text{Ansatz: } f(x) = ax^3 + bx^2 + cx + d$$

$$f'(x) = 3ax^2 + 2bx + c$$



$$f(1) = 0: \quad a + b + c + d = 0 \quad (1)$$

$$f'(1) = 1: \quad 3a + 2b + c = 1 \quad (2)$$

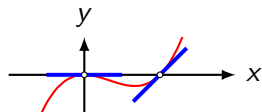
$$f(0) = 0: \quad d = 0 \quad (3)$$

$$f'(0) = 0: \quad c = 0 \quad (4)$$

Aufgabe 4.9

$$\text{Ansatz: } f(x) = ax^3 + bx^2 + cx + d$$

$$f'(x) = 3ax^2 + 2bx + c$$



$$f(1) = 0: \quad a + b + c + d = 0 \quad (1)$$

$$f'(1) = 1: \quad 3a + 2b + c = 1 \quad (2)$$

$$f(0) = 0: \quad d = 0 \quad (3)$$

$$f'(0) = 0: \quad c = 0 \quad (4)$$

$$\begin{aligned} a + b = 0 &\Rightarrow a = -b \\ 3a + 2b = 1 &\Rightarrow 3(-b) + 2b = 1 \Rightarrow -b = 1 \Rightarrow b = -1 \\ &\Rightarrow a = 1 \end{aligned} \quad \Rightarrow \quad f(x) = x^3 - x^2$$

$$\int_0^1 f(x) dx = \left[\frac{1}{4}x^4 - \frac{1}{3}x^3 \right]_0^1 = -\frac{1}{12} \quad \Rightarrow \quad A = \frac{1}{12}$$

Aufgabe 4.13

- (a) Bestimme a so, dass die Parabel $p: y = 2x^3 - 6x + a$ die x -Achse in einem Tiefpunkt berührt.
- (b) Skizziere die Parabel und berechne den Inhalt zwischen Parabel und x -Achse.

Aufgabe 4.13

$$p(x) = 2x^3 - 6x + a$$

$$p'(x) = 6x^2 - 6$$

$$p''(x) = 12x$$

(a) Tiefstellen:

$$p'(x) = 0$$

$$6x^2 - 6 = 0$$

$$6(x^2 - 1) = 0$$

$$x_1 = -1 \Rightarrow p''(-1) = -12 < 0 \Rightarrow \text{HoP}(-1, 4 + a)$$

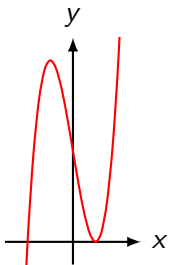
$$x_2 = 1 \Rightarrow p''(1) = 12 > 0 \Rightarrow \text{TiP}(1, -4 + a)$$

Die Parabel p soll die x -Achse in $\text{TiP}(1, -4 + a)$ berühren.

$$\Rightarrow a = 4 \quad \Rightarrow \quad p(x) = 2x^3 - 6x + 4$$

(b) $p(x) = 2x^3 - 6x + 4$

Nullstellen: $x_1 = x_2 = 1$, $x_3 = -2$; Ordinatenabschnitt: $y_0 = 4$



$$A = \int_{-2}^1 (2x^3 - 6x + 4) dx = \left[\frac{1}{2}x^4 - 3x^2 + 4x \right]_{-2}^1 = 13.5$$

Aufgabe 4.14

Berechne den Inhalt des Flächenstückes, das die Graphen der Funktionen f_1 und f_2 einschliessen.

(b) $f_1: y = x$ $f_2: y = x^3$

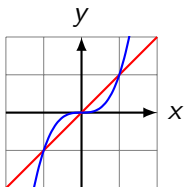
(c) $f_1: y = 2x - 3$ $f_2: y = x^2 - 2x - 8$

(d) $f_1: y = x^3$ $f_2: y = 2x - x^2$

Aufgabe 4.14

(b) $f_1: y = x$

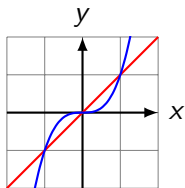
$f_2: y = x^3$



Aufgabe 4.14

(b) $f_1: y = x$

$f_2: y = x^3$



$$A = 2 \int_0^1 (x - x^3) = 2 \left[\frac{1}{2}x^2 - \frac{1}{4}x^4 \right]_0^1 = 2 \cdot \left(\frac{1}{2} - \frac{1}{4} \right) = \frac{1}{2}$$

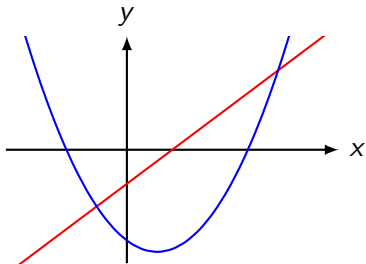
(c) $f_1: y = 2x - 3$ $f_2: y = x^2 - 2x - 8$

$$2x - 3 = x^2 - 2x - 8$$

$$0 = x^2 - 4x - 5 = (x - 5)(x + 1)$$

$$x_1 = -1 \Rightarrow y_1 = -5$$

$$x_2 = 5 \Rightarrow y_2 = 7$$



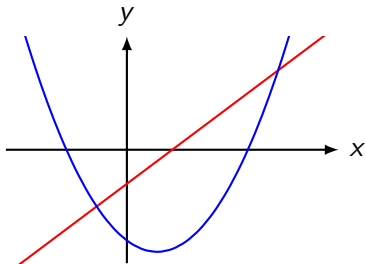
$$(c) f_1: y = 2x - 3 \quad f_2: y = x^2 - 2x - 8$$

$$2x - 3 = x^2 - 2x - 8$$

$$0 = x^2 - 4x - 5 = (x - 5)(x + 1)$$

$$x_1 = -1 \Rightarrow y_1 = -5$$

$$x_2 = 5 \Rightarrow y_2 = 7$$



$$A = \int_{-1}^5 (2x - 3 - (x^2 - 2x - 8)) dx$$

$$= \int_{-1}^5 (-x^2 + 4x + 5) dx = \left[-\frac{1}{3}x^3 + x^2 + 5x \right]_{-1}^5 = 36$$

(d) $f_1: y = x^3$ $f_2: y = 2x - x^2$

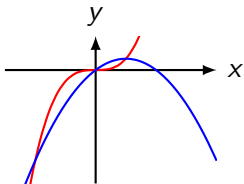
$$x^3 = 2x - x^2$$

$$0 = x^3 + x^2 - 2x = x(x^2 + x - 2) = x(x - 1)(x + 2)$$

$$x_1 = 0 \quad \Rightarrow \quad y_1 = 0$$

$$x_2 = 1 \quad \Rightarrow \quad y_2 = 1$$

$$x_3 = -2 \quad \Rightarrow \quad y_3 = -8$$



$$(d) \quad f_1: y = x^3 \qquad f_2: y = 2x - x^2$$

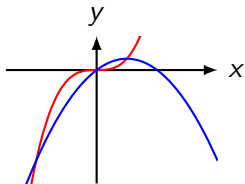
$$x^3 = 2x - x^2$$

$$0 = x^3 + x^2 - 2x = x(x^2 + x - 2) = x(x - 1)(x + 2)$$

$$x_1 = 0 \quad \Rightarrow \quad y_1 = 0$$

$$x_2 = 1 \quad \Rightarrow \quad y_2 = 1$$

$$x_3 = -2 \quad \Rightarrow \quad y_3 = -8$$



$$A_1 = \int_{-2}^0 (x^3 + x^2 - 2x) dx = \left[\frac{1}{4}x^4 + \frac{1}{3}x^3 - x^2 \right]_{-2}^0 = \frac{8}{3}$$

$$A_2 = \int_1^0 (x^3 + x^2 - 2x) dx = \left[\frac{1}{4}x^4 + \frac{1}{3}x^3 - x^2 \right]_1^0 = \frac{5}{12}$$

$$A = A_1 + A_2 = \frac{37}{12}$$

Aufgabe 4.15

- (a) Bestimme die Extrema der Parabel $p: y = x^3 - 3x^2 + 6$ und skizziere die Parabel.
- (b) Welchen Inhalt hat die Fläche zwischen Parabel und Tangente im Tiefpunkt?

Aufgabe 4.15

$$p(x) = x^3 - 3x^2 + 6$$

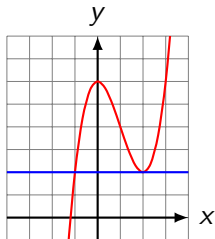
$$p'(x) = 3x^2 - 6x = 3x(x - 2)$$

$$p''(x) = 6x - 6 = 6(x - 1)$$

(a) $p'(x) = 0$

$$x_1 = 0 \Rightarrow p''(0) = -6 < 0 \Rightarrow \text{HoP}(0, 6)$$

$$x_2 = 2 \Rightarrow p''(2) = 6 > 0 \Rightarrow \text{TiP}(2, 2)$$



(b) $t: y = 2$ (parallel zur x -Achse durch TiP)

$$p(x) = t(x)$$

$$x^3 - 3x^2 + 6 = 2$$

$$x^3 - 3x^2 + 4 = 0$$

$$x_1 = x_2 = 2$$

$$x_3 = -1$$

$$A = \int_{-1}^2 (f(x) - t(x)) dx = \int_{-1}^2 (x^3 - 3x^2 + 4) dx$$

$$= \left[\frac{1}{4}x^4 - x^3 + 4x \right]_{-1}^2 = \frac{27}{4} = 6.75$$

Aufgabe 4.19

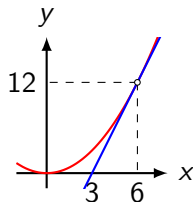
Welchen Inhalt hat die Fläche, die von der Parabel $p: x^2 - 3y = 0$, der Kurventangente in $P(6, y)$ und der x -Achse begrenzt wird?

Aufgabe 4.19

$$p(x) = \frac{1}{3}x^2; p'(x) = \frac{2}{3}x$$

Kurventangente in $P(6, y)$ (z. B. via Taylorpolynom)

$$t(x) = f(6) + f'(6)(x - 6) = 12 + 4(x - 6) = 4x - 12$$



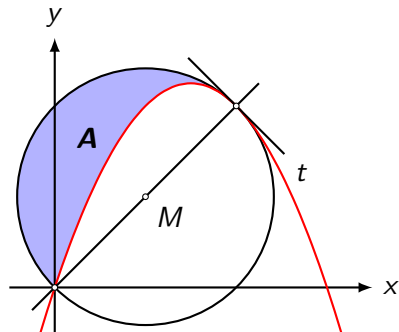
Nullstelle von t : $x = 3$

$$\begin{aligned} A &= A_{\text{Parabel}} - A_{\text{Dreieck}} = \int_0^6 \frac{1}{3}x^2 dx - \frac{1}{2} \cdot 3 \cdot 12 - \\ &= \left[\frac{1}{9}x^3 \right]_0^6 - 18 = 24 - 18 = 6 \end{aligned}$$

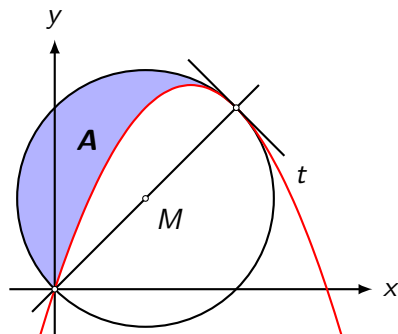
Aufgabe 4.38

Ein Kreis mit dem Mittelpunkt $M(2,2)$ und eine quadratische Parabel p sind gegeben (siehe Bild). Im Punkt P besitzen sie eine gemeinsame Tangente t .

Bestimme die Gleichung der Parabel p und den Inhalt der hervorgehobenen Fläche A .



Aufgabe 4.38



Kreis mit $M(2,2)$ und $r = \sqrt{2^2 + 2^2} = 2\sqrt{2}$

Ansatz: $f(x) = ax^2 + bx$ ($c = 0$ da $(0,0) \in G_f$)

$$f'(x) = 2ax + b$$

$$f(4) = 4: 16a + 4b = 4 \quad \Rightarrow \quad 4a + b = 1 \quad (1)$$

$$f'(4) = -1: 8a + b = -1 \quad (2)$$

$$(1) (2) \Rightarrow f(x) = -\frac{1}{2}x^2 + 3x$$

Gleichung des Durchmessers: $g(x) = x$

Fläche zwischen Diagonale und Parabel:

$$\begin{aligned} I &= \int_0^4 (f(x) - g(x)) dx = \int_0^4 \left(-\frac{1}{2}x^2 + 3x - x\right) dx \\ &= \int_0^4 \left(-\frac{1}{2}x^2 + 2x\right) dx = \left[-\frac{1}{6}x^3 - x^2\right]_0^4 = \frac{16}{3} \end{aligned}$$

$$A = \frac{1}{2}A_K - I = 4\pi - \frac{16}{3} \approx 7.23$$